


HAVE AN AMAZINGLY, BLESSED SUMMER!

SAY HELLO...



TO ANOTHER SUMMER!



INCOMING 6TH GRADE SUMMER PACKET 2023

NAME: _____

your summer to do list:

go to the library lay in the grass

write a letter to a friend

doodle have a sleep over

run through the sprinklers

watch the fireflies build a fort

keep a journal **VISIT A ZOO**

LOOK AT THE STARS

SWIM go to the movies

call a relative **DO A GOOD DEED**

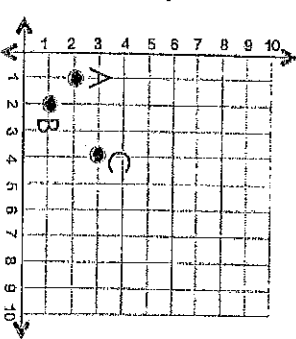
SMILE try something new

watch a sunset **BE SILLY**

Week One

Problem	Work & Answer
<p>List the factors of each number.</p> <p>a.) 24 b.) 64</p>	
<p>Fill in the missing number.</p> <p>a.) $0.24 - .128 = ?$ b.) $94.19 + 2.6 + \underline{\quad} = 161.29$</p>	
<p>Compare using $<$, $>$, or $=$</p> <p>a.) 0.245 <input type="radio"/> 0.0245 b.) 24.500 <input type="radio"/> 24.5 c.) 20.405 <input type="radio"/> 20.45</p>	
<p>Write the following in expanded form:</p> <p>a.) 0.234 b.) 14.78</p>	
<p>Divide:</p> <p>a.) $2,936 \div 4$ b.) $14,783 \div 12$</p>	

Week Two

Problem	Work & Answer
<p>List the next four terms in the sequences with the given rule:</p> <p>a.) Start at 0, add three</p> <p>b.) Start at 0, add six</p> <p>c.) What is the relationship between the two sequences?</p> <p>Multiply:</p> <p>a.) 23.5×6</p> <p>b.) 2.35×0.6</p> <p>c.) 235.0×0.06</p>	
<p>Name each ordered pair.</p> 	
<p>Find each sum: a.) $\frac{1}{2} + \frac{1}{4}$ b.) $\frac{1}{4} + \frac{1}{3} + 3\frac{7}{12}$</p>	
<p>Round each number to the nearest tenth:</p> <p>a.) 985.76 b.) 43.52 c.) 0.859</p>	

Name:

Capitalization & Punctuation (6)

Write correct letter in the box provided

1. Choose the sentence with correct capitalization and punctuation.

- A. Beth enjoys learning about the Spanish Civil War.
- B. Beth enjoys learning, about the Spanish Civil War.
- C. Beth enjoys learning about the spanish civil war.

2. Find the sentence that has no errors in capitalization.

- A. Mike's cousin lives in Atlanta, georgia.
- B. Mike's cousin lives in atlanta, georgia.
- C. Mike's cousin lives in Atlanta, Georgia.

3. Which sentence is capitalized correctly?

- A. Meg has just moved from Santa Clara County, California.
- B. Meg has just moved from Santa Clara county, California.
- C. Meg has just moved from Santa Clara County California.

4. In summer, I will visit _____.


- A. Boston, Massachusetts.
- B. Boston Massachusetts.
- C. Boston, massachusetts.

5. Which sentence correctly uses commas?

- A. My three favorite months are January April, and May.
- B. I cleaned your shirt, tie socks and shorts.
- C. We need red pens, blue magnets, and a new whiteboard.

6. Which sentence correctly uses commas?

- A. I'm opening, a new box of markers.
- B. Can you, picture the look on his face?
- C. You, however, did very well.

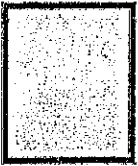


7. Which of the following sentences uses quotations correctly?



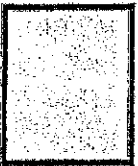
- A. "Bring me that ruler!" Mrs. Thomas roared.
- B. "Bring me that ruler! Mrs. Thomas" roared.
- C. "Bring me that ruler! Mrs. Thomas roared."

8. Choose the sentence that is written correctly.



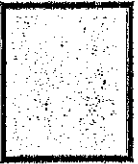
- A. I visited relatives in Calgary, Alberta.
- B. I visited relatives in, Calgary Alberta.
- C. I visited relatives in, Calgary, Alberta.

9. Which sentence is correct?



- A. For centuries the townsfolk used to have a feast on July 1.
- B. For centuries the, townsfolk used to have a feast on July 1.
- C. For centuries the townsfolk used to have a feast on july 1.

10. Find the sentence that has no errors in capitalization.



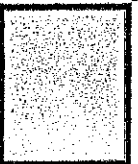
- A. Denise loves traveling in Africa. She visited Morocco this year.
- B. Denise loves traveling in africa. She visited Morocco this year.
- C. Denise loves traveling in Africa. She visited morocco this year.

11. Which sentence is correct?



- A. Summers in Las Vegas Nevada, are extremely hot
- B. Summers in, Las Vegas Nevada are extremely hot.
- C. Summers in Las Vegas, Nevada are extremely hot.

12. My _____ cat has gone missing.





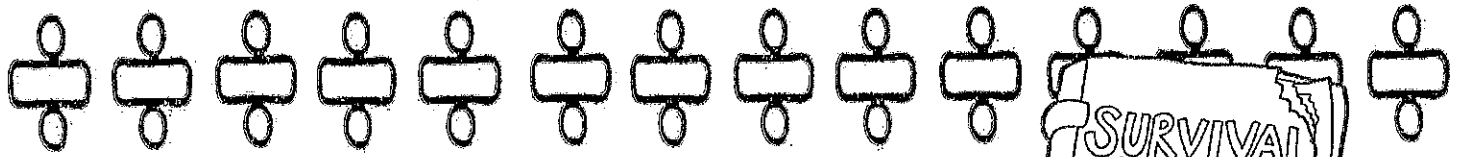
- A. uncle's
- B. uncles'
- C. uncles's

13. I took _____ mother to the doctor.



- A. Sallys
- B. Sally's
- C. Sallys'





Name: _____

Division Practice

Solve each division equation below.

$$972 \div 81 = \underline{\hspace{2cm}}$$

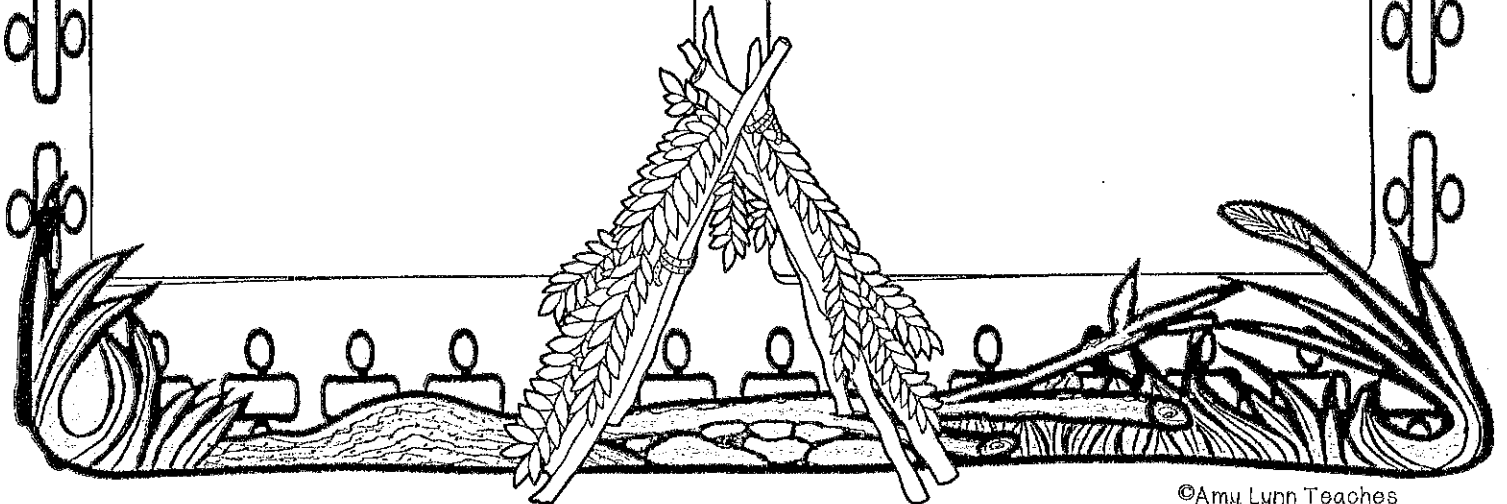
$$405 \div 15 = \underline{\hspace{2cm}}$$

$$585 \div 65 = \underline{\hspace{2cm}}$$

$$882 \div 49 = \underline{\hspace{2cm}}$$

$$338 \div 26 = \underline{\hspace{2cm}}$$

$$648 \div 72 = \underline{\hspace{2cm}}$$



Name: _____

Date: _____ # _____

1 Find the sum:

$$\begin{array}{r} 2, 193 \\ + 3, 622 \\ \hline \end{array}$$

2 Find the difference:


$$\begin{array}{r} 4, 728 \\ - 691 \\ \hline \end{array}$$

3 Find the product:

$$\begin{array}{r} 7, 526 \\ \times 5 \\ \hline \end{array}$$

4 Find the quotient:

$$370 \div 5 =$$



5

6 groups of \square is the same as 48.

6 Round to the nearest hundred.

59,450

7

What is the space between two intersecting lines called?

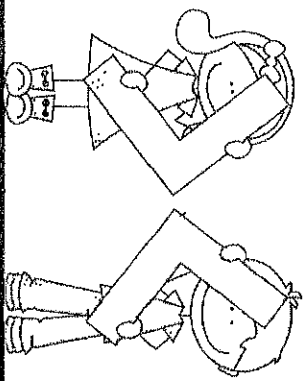


8

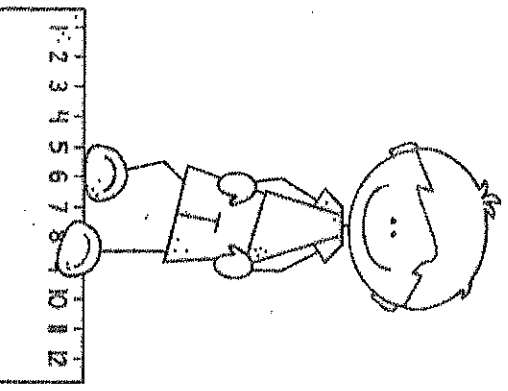
The students were asked to read during the summer. The total number of books read was 2,434. If 1,822 were fiction and the rest were nonfiction, how many nonfiction books were read?

9 put the fractions in order from least to greatest.

$\frac{2}{3}$ $\frac{1}{2}$ $\frac{1}{4}$



10 The classroom door is 7 and a half feet tall. How many inches tall is it?




#	answer
1	
2	
3	
4	
5	
6	
7	
8	
9	
10	

Hundred Puzzle #19

Name: _____

Directions: Use the clues to find the one correct mystery number.

1	2	3	4	5	6	7	8	9	10
11	12	13	14	15	16	17	18	19	20
21	22	23	24	25	26	27	28	29	30
31	32	33	34	35	36	37	38	39	40
41	42	43	44	45	46	47	48	49	50
51	52	53	54	55	56	57	58	59	60
61	62	63	64	65	66	67	68	69	70
71	72	73	74	75	76	77	78	79	80
81	82	83	84	85	86	87	88	89	90
91	92	93	94	95	96	97	98	99	100



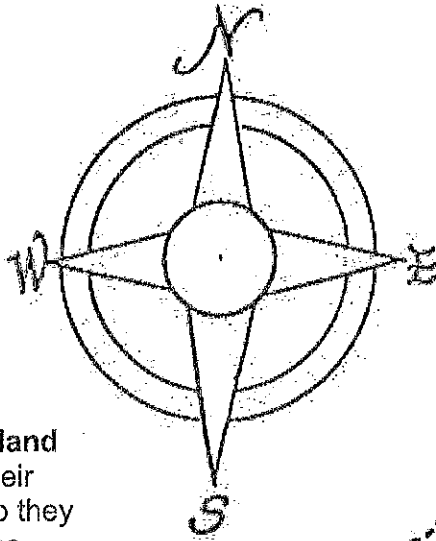
Clues:

1. The mystery number is less than the number of years in $\frac{3}{4}$ of a century.
2. The number is not between the value of 3 nickels and 2 quarters.
3. It is not a multiple of two.
4. The product of the digits is greater than 30.
5. The digit in the tens place is one less the digit in the ones place.
6. The sum of the digits = 13.

The mystery number is _____

Name: _____ Date: _____

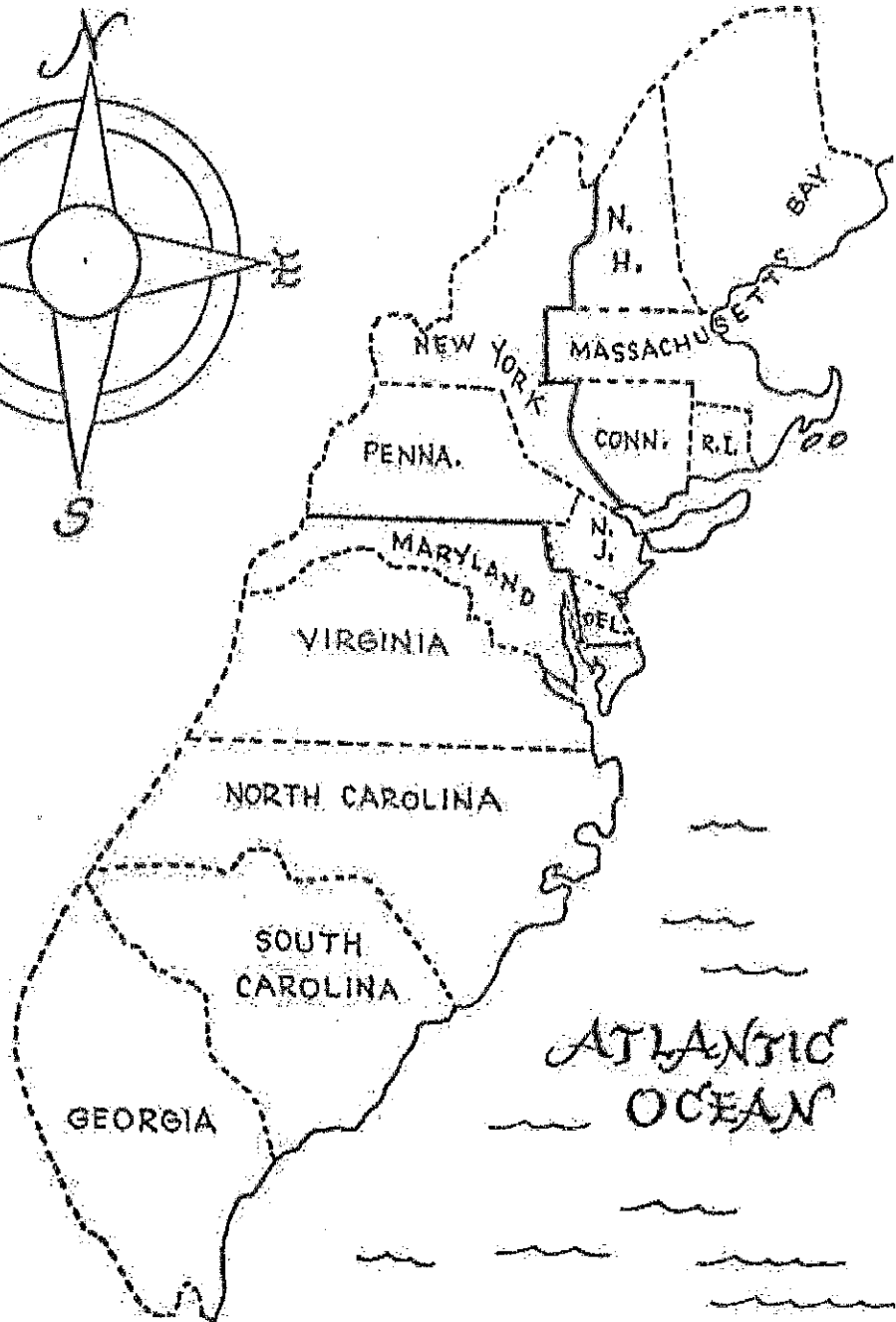
America's First 13 Colonies and Their Natural Resources



Color the **New England colonies** BLUE. Their climate was cold, so they relied on subsistence farming, trade, and shipbuilding. Natural resources were fish, whales, and forests. They imported agricultural products from other colonies. Farming was difficult for crops like wheat but corn, pumpkins, rye, squash and beans were raised

Color the **Middle colonies** YELLOW. Their climate was moderate, and they relied on farming and trading. They were the big food producing region that included corn and wheat, as well as livestock including beef and pork. Other industries included the production of iron ore, lumber, textiles, and furs.

Color the **South colonies** RED. Their climate was warm, so they focused on farming. Here, it was possible to grow crops throughout the year, so was ideally suited for plantations. They exported tobacco, cotton, rice, indigo (dye), lumber, furs, and farm products.



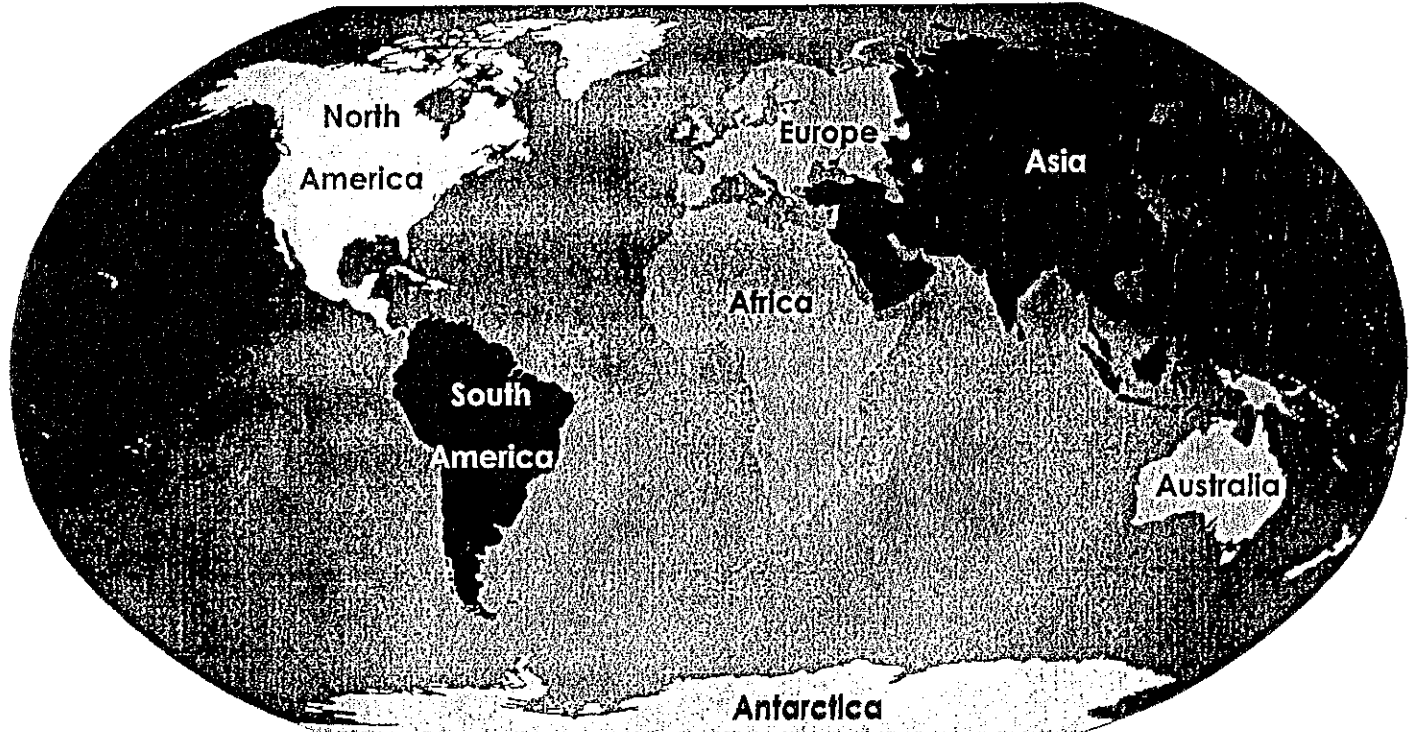


WEATHER AROUND THE WORLD

Life Skills ♦ Weather ♦ Temperature

Name: _____

Date: _____



Find out the weather for 5 different locations around the world:

	Country	City	High	Low
1	United States	San Francisco		
2	Brazil	Rio de Janeiro		
3	Africa	Madagascar		
4	France	Paris		
5	India	Mumbai		